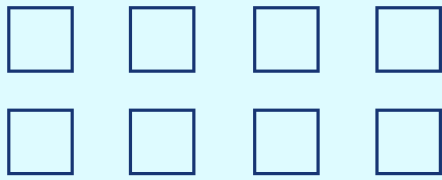


# Counting And Multiplying




Count the items and fill in the blanks with the correct numbers through multiplication. The first question is solved for you.




2 rows of 4

$$\underline{2} \times \underline{4} = \underline{8}$$



     rows of     

$$\underline{\quad} \times \underline{\quad} = \underline{\quad}$$



     rows of     

$$\underline{\quad} \times \underline{\quad} = \underline{\quad}$$



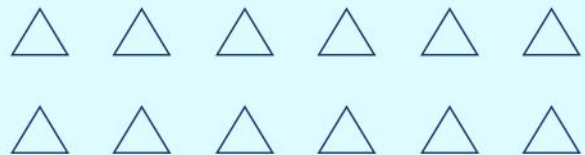
     rows of     

$$\underline{\quad} \times \underline{\quad} = \underline{\quad}$$



     rows of     

$$\underline{\quad} \times \underline{\quad} = \underline{\quad}$$



     rows of     

$$\underline{\quad} \times \underline{\quad} = \underline{\quad}$$