






# Identify The Correct Fraction





Based on the given images, circle the correct fraction from the options.


1.   
 $\frac{1}{5}$  ,  $\frac{2}{5}$  ,  $\frac{4}{5}$


2.   
 $\frac{1}{4}$  ,  $\frac{2}{4}$  ,  $\frac{3}{4}$


3.   
 $\frac{3}{6}$  ,  $\frac{5}{6}$  ,  $\frac{2}{6}$


4.   
 $\frac{3}{4}$  ,  $\frac{2}{4}$  ,  $\frac{1}{4}$


5.   
 $\frac{3}{10}$  ,  $\frac{2}{10}$  ,  $\frac{7}{10}$


6.   
 $\frac{2}{6}$  ,  $\frac{1}{6}$  ,  $\frac{4}{6}$


7.   
 $\frac{1}{3}$  ,  $\frac{2}{3}$  ,  $\frac{1}{4}$

8.   
 $\frac{1}{2}$  ,  $\frac{2}{4}$  ,  $\frac{1}{1}$

9.   
 $\frac{3}{5}$  ,  $\frac{2}{5}$  ,  $\frac{1}{5}$

10.   
 $\frac{3}{8}$  ,  $\frac{2}{8}$  ,  $\frac{5}{8}$

11.   
 $\frac{4}{9}$  ,  $\frac{5}{9}$  ,  $\frac{2}{9}$

12.   
 $\frac{5}{12}$  ,  $\frac{7}{12}$  ,  $\frac{9}{12}$