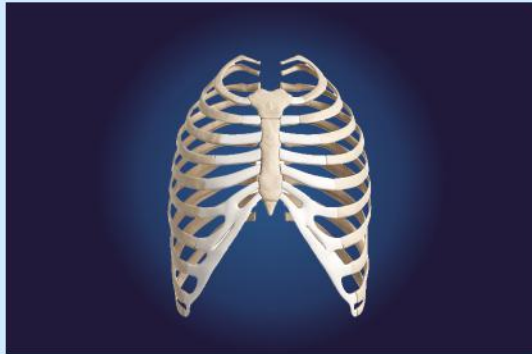


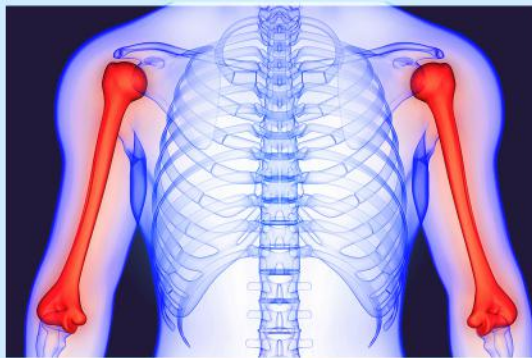
Parts Of The Skeletal System

The following activities are based on the content provided in the skeletal system worksheet. You will find all the answers in the explanation and diagrams.

Based on the illustrations in the previous sheets, try to identify the bones and write their names in the adjacent column.



--



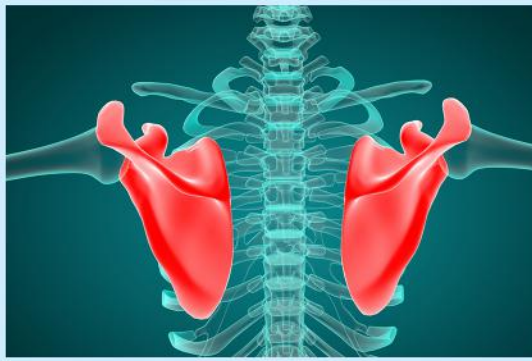
--



--



--



Based on the description given in the previous sheets, answer the following questions:

1. What is the main role of the skeletal system?

2. What are the components of the skeletal system?

3. How many bones does the human body consist of?

4. Which vital organ does the skull protect?

5. Which vital organs does the rib cage protect?

6. What are the two examples of ball and socket joints?

7. What are the two examples of a hinge joint?

8. What is the role of osteocalcin?

9. What is a cartilage?

10. What is a tendon?

11. What is a ligament?

12. What roles do the ligament and cartilage play?

13. What is a joint?

14. What is the main mineral found in bones?

15. What is the inner soft part of the bone known as, and what is its role?
